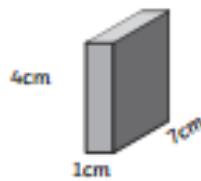


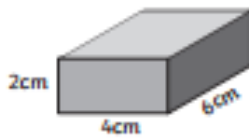
Compare Volume of Cuboid Activity Sheet (1) Answers

Compare the volume of the following cuboids.

1.

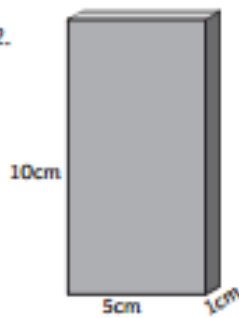


Volume = 28cm^3

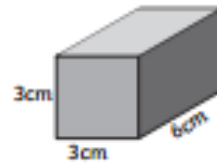


Volume = 48cm^3

2.

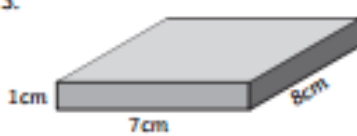


Volume = 50cm^3

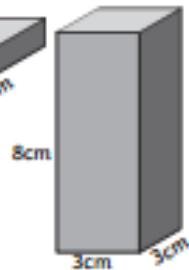


Volume = 54cm^3

3.

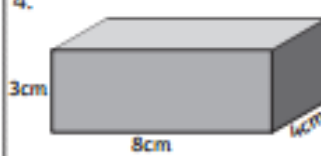


Volume = 56cm^3

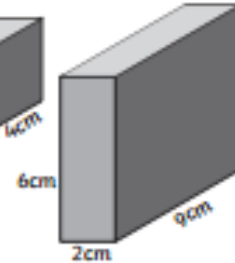


Volume = 72cm^3

4.

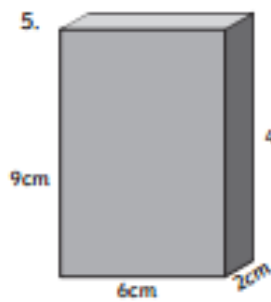


Volume = 96cm^3

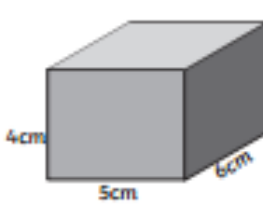


Volume = 108cm^3

5.

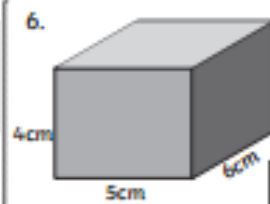


Volume = 108cm^3

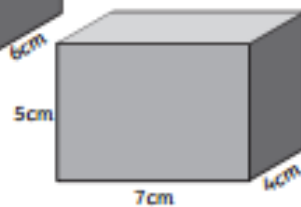


Volume = 120cm^3

6.



Volume = 120cm^3



Volume = 140cm^3

Challenge

Find 2 boxes of similar size; measure and compare the volume.