


Calculate Volume of Cuboid Activity Sheet (1) **Answers**

Calculate the volume of the following cuboids.

1.



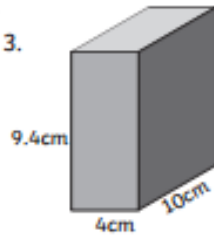
Volume = **57cm³**

2.



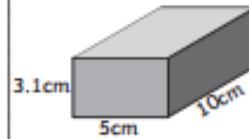
Volume = **70.3cm³**

3.



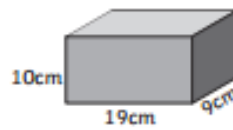
Volume = **376cm³**

4.



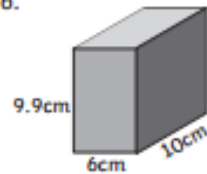
Volume = **155cm³**

5.



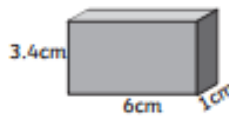
Volume = **1710cm³**

6.




Volume = **594cm³**

7.



Volume = **20.4cm³**

8.



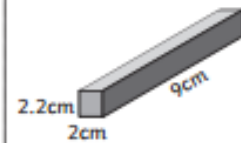
Volume = **19.5cm³**

9.



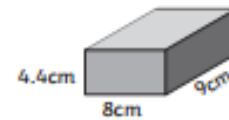
Volume = **236cm³**

10.



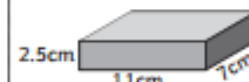
Volume = **39.6cm³**

11.



Volume = **316.8cm³**

12.



Volume = **192.5cm³**